

Zadanie 1: Zapisz działanie według wzoru.

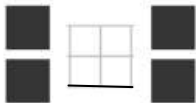
 i  to 

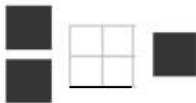
1	+	1	=	2
---	---	---	---	---


 i  to 

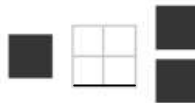
 i  to 

Zadanie 2: Wstaw odpowiedni znak i podpis: (>, <, =)

















Zadanie 3: Zapisz działanie.

 i 

 ~~~~

 i 

 ~~~~

